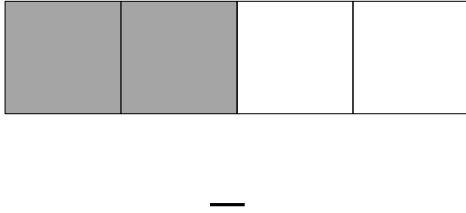



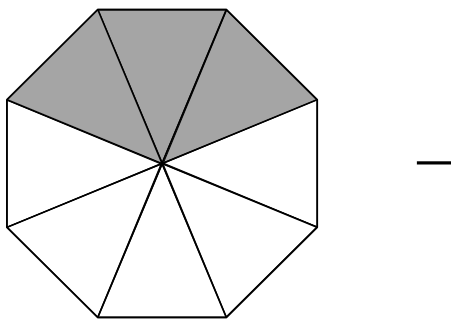
Which fraction is marked?  
Use the fraction line to indicate the fraction!



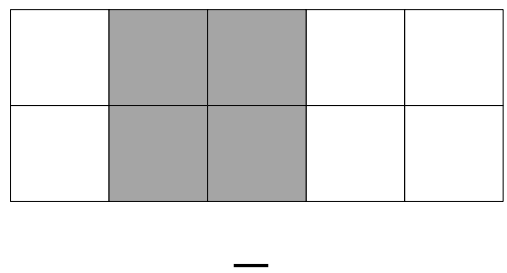
Which fraction is marked?  
Use the fraction line to indicate the fraction!




Which fraction is marked?  
Use the fraction line to indicate the fraction!



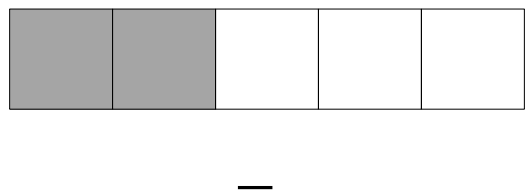
Which fraction is marked?  
Use the fraction line to indicate the fraction!



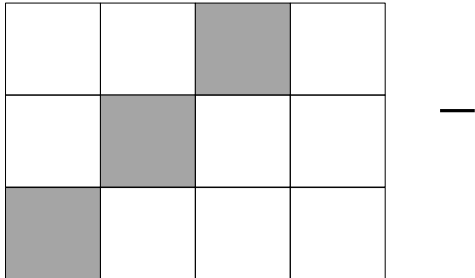
Which fraction is marked?  
Use the fraction line to indicate the fraction!



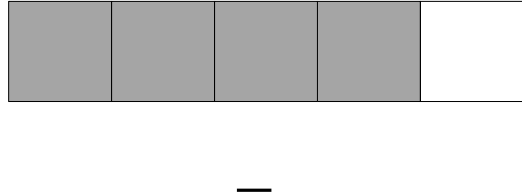
Which fraction is marked?  
Use the fraction line to indicate the fraction!



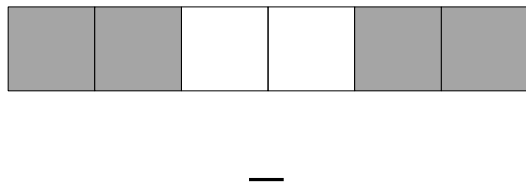
Which fraction is marked?  
Use the fraction line to indicate the fraction!



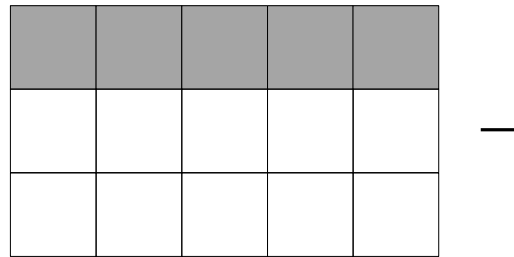
Which fraction is marked?  
Use the fraction line to indicate the fraction!



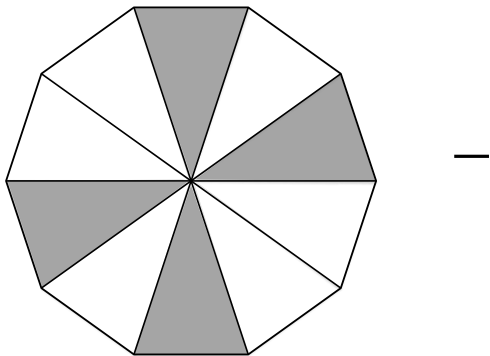
Which fraction is marked?  
Use the fraction line to indicate the fraction!



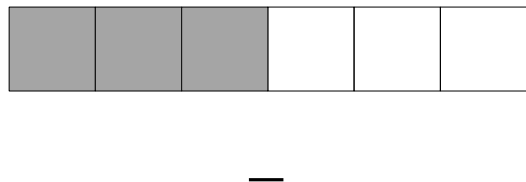
Which fraction is marked?  
Use the fraction line to indicate the fraction!



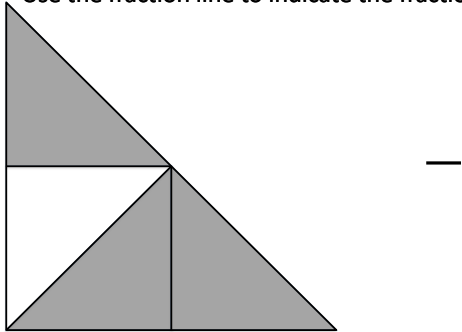
Which fraction is marked?  
Use the fraction line to indicate the fraction!



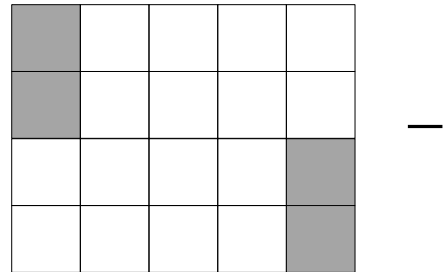
Which fraction is marked?  
Use the fraction line to indicate the fraction!



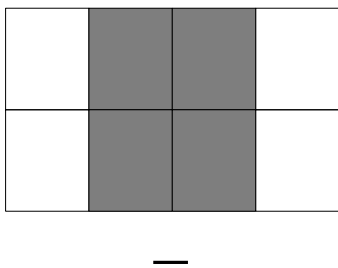
Which fraction is marked?  
Use the fraction line to indicate the fraction!



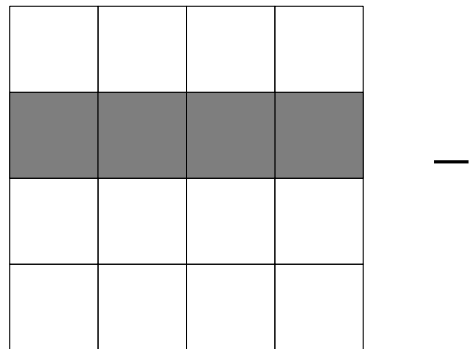
Which fraction is marked?  
Use the fraction line to indicate the fraction!



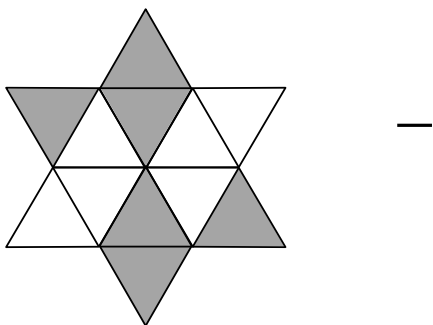
Which fraction is marked?  
Use the fraction line to indicate the fraction!



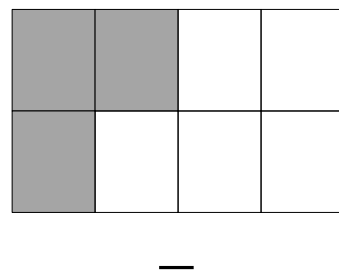
Which fraction is marked?  
Use the fraction line to indicate the fraction!




Which fraction is marked?  
Use the fraction line to indicate the fraction!



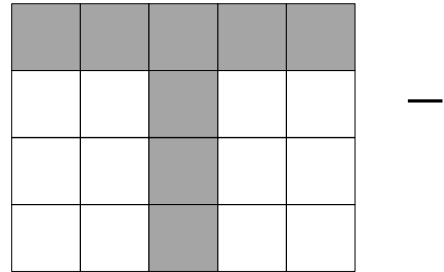
Which fraction is marked?  
Use the fraction line to indicate the fraction!



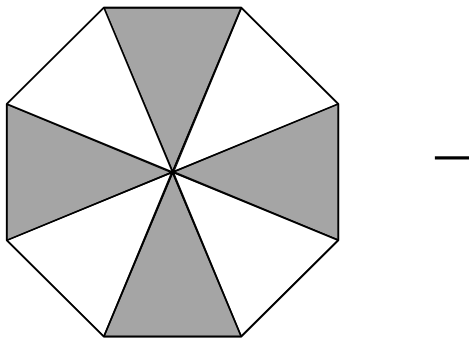
Which fraction is marked?  
Use the fraction line to indicate the fraction!




Which fraction is marked?  
Use the fraction line to indicate the fraction!



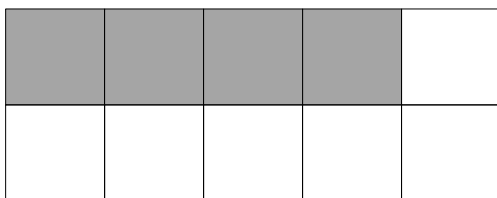
Which fraction is marked?  
Use the fraction line to indicate the fraction!



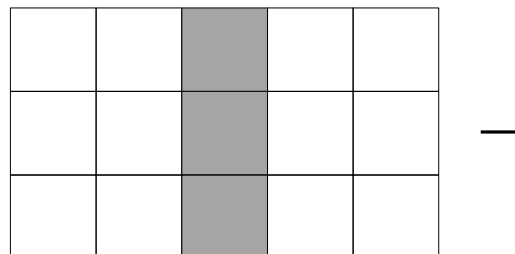
Which fraction is marked?  
Use the fraction line to indicate the fraction!



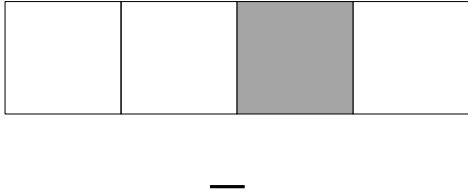
Which fraction is marked?  
Use the fraction line to indicate the fraction!



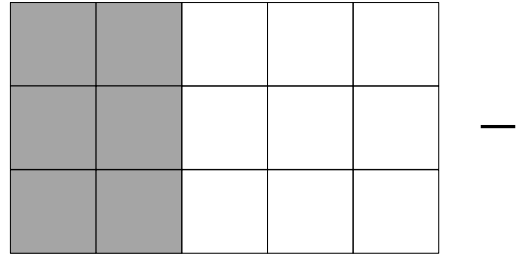
Which fraction is marked?  
Use the fraction line to indicate the fraction!



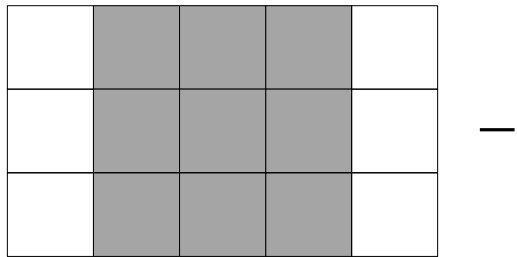
Which fraction is marked?  
Use the fraction line to indicate the fraction!



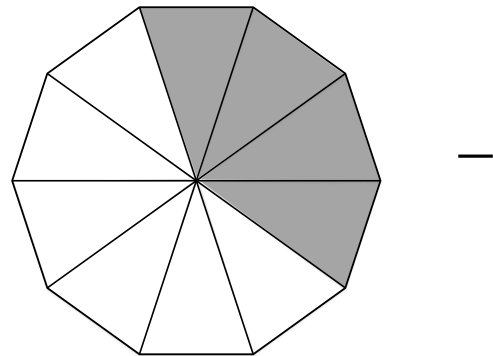
Which fraction is marked?  
Use the fraction line to indicate the fraction!



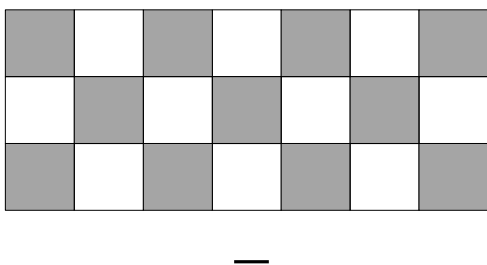
Which fraction is marked?  
Use the fraction line to indicate the fraction!



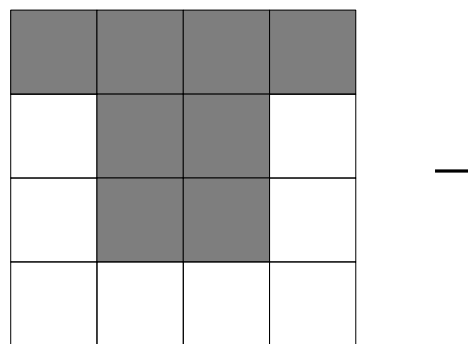
Which fraction is marked?  
Use the fraction line to indicate the fraction!



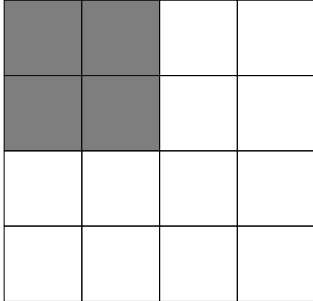
Which fraction is marked?  
Use the fraction line to indicate the fraction!



Which fraction is marked?  
Use the fraction line to indicate the fraction!

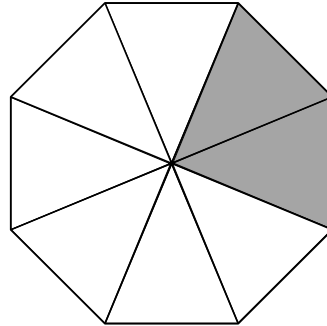


Which fraction is marked?  
Use the fraction line to indicate the fraction!



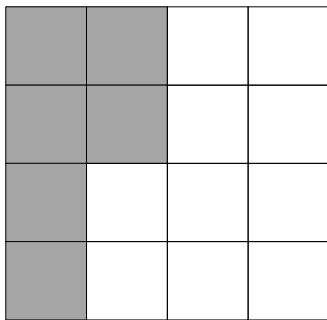
—

Which fraction is marked?  
Use the fraction line to indicate the fraction!



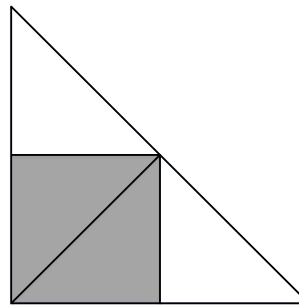
—

Which fraction is marked?  
Use the fraction line to indicate the fraction!



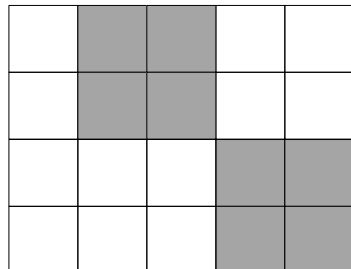
—

Which fraction is marked?  
Use the fraction line to indicate the fraction!



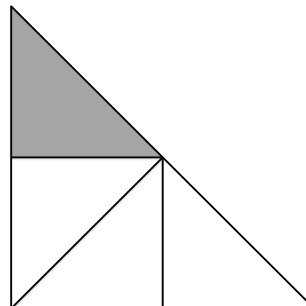
—

Which fraction is marked?  
Use the fraction line to indicate the fraction!



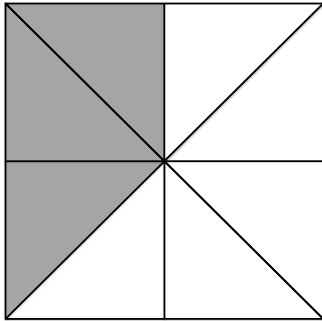
—

Which fraction is marked?  
Use the fraction line to indicate the fraction!




—

Which fraction is marked?  
Use the fraction line to indicate the fraction!



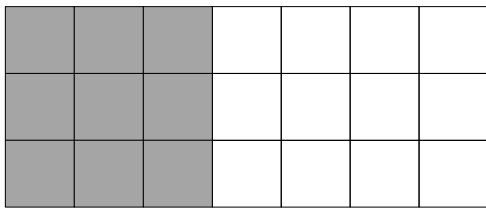
—

Which fraction is marked?  
Use the fraction line to indicate the fraction!



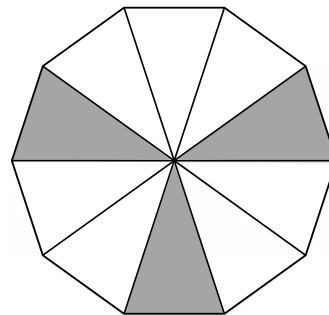
—

Which fraction is marked?  
Use the fraction line to indicate the fraction!



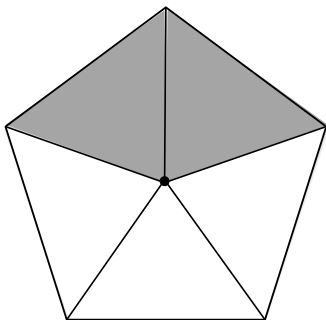
—

Which fraction is marked?  
Use the fraction line to indicate the fraction!




—

Which fraction is marked?  
Use the fraction line to indicate the fraction!



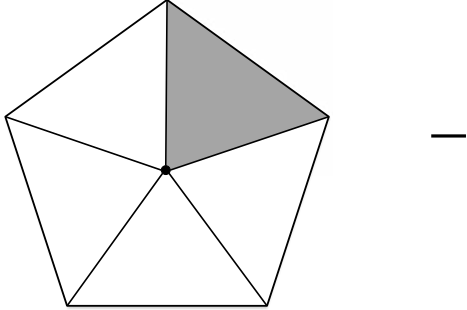
—

Which fraction is marked?  
Use the fraction line to indicate the fraction!

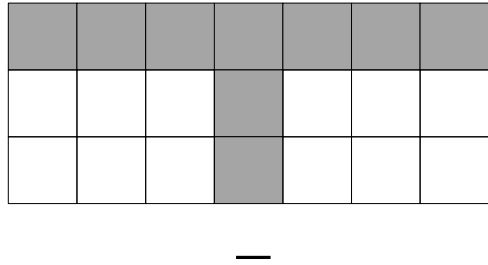


—

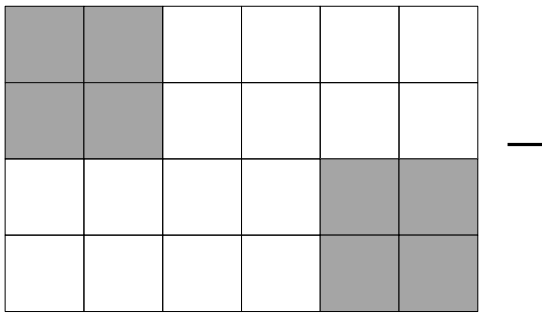
Which fraction is marked?  
Use the fraction line to indicate the fraction!



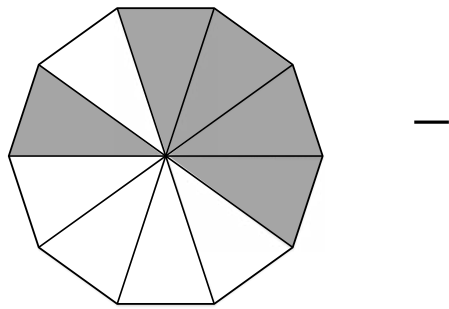
Which fraction is marked?  
Use the fraction line to indicate the fraction!




Which fraction is marked?  
Use the fraction line to indicate the fraction!



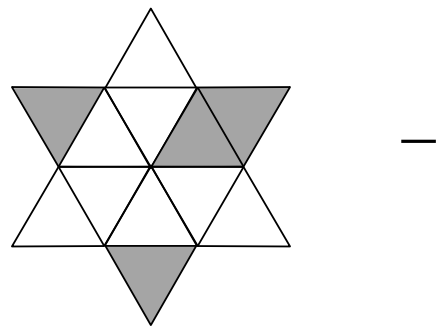
Which fraction is marked?  
Use the fraction line to indicate the fraction!



Which fraction is marked?  
Use the fraction line to indicate the fraction!




Which fraction is marked?  
Use the fraction line to indicate the fraction!



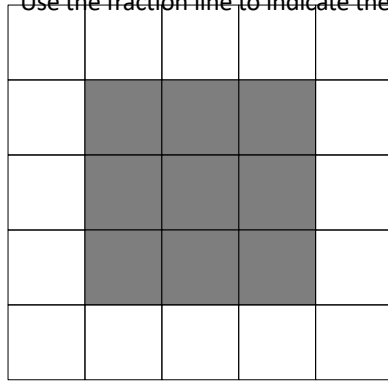


Which fraction is marked?  
Use the fraction line to indicate the fraction!



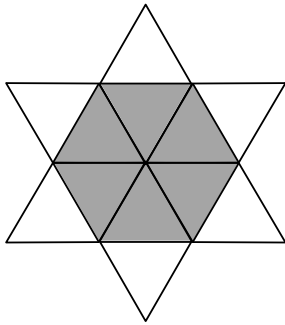
—

Welcher Bruchteil ist markiert?  
Use the fraction line to indicate the fraction!



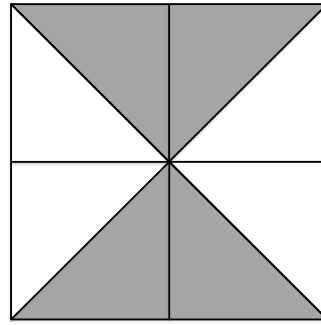
—

Which fraction is marked?  
Use the fraction line to indicate the fraction!



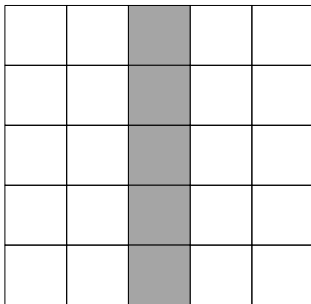
—

Which fraction is marked?  
Use the fraction line to indicate the fraction!



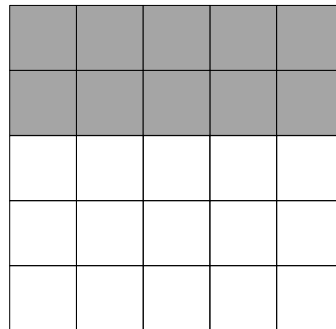
—

Which fraction is marked?  
Use the fraction line to indicate the fraction!



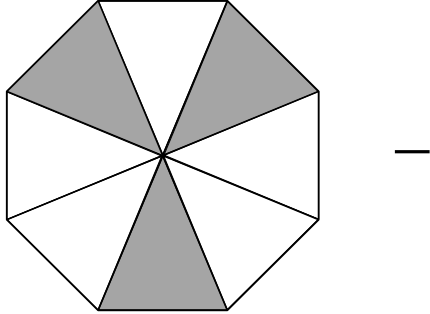
—

Which fraction is marked?  
Use the fraction line to indicate the fraction!

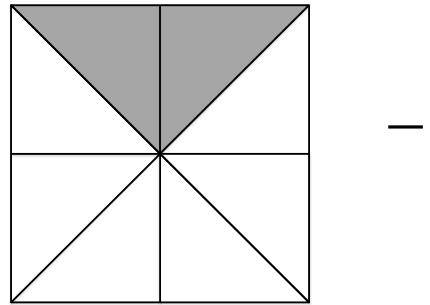


—

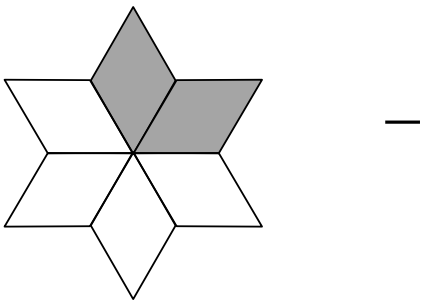
Which fraction is marked?  
Use the fraction line to indicate the fraction!



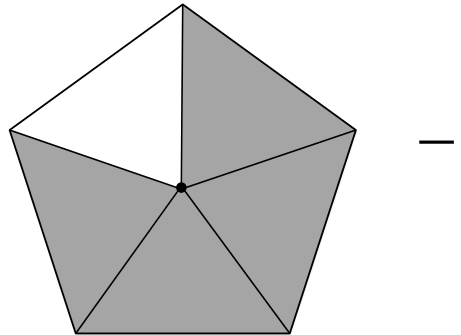
Which fraction is marked?  
Use the fraction line to indicate the fraction!



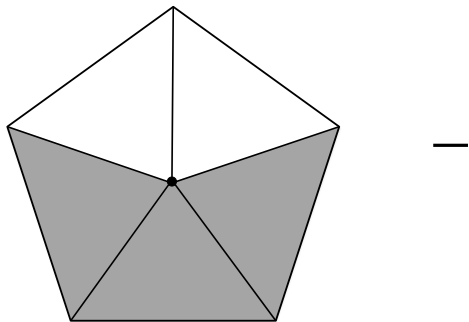
Which fraction is marked?  
Use the fraction line to indicate the fraction!



Which fraction is marked?  
Use the fraction line to indicate the fraction!



Which fraction is marked?  
Use the fraction line to indicate the fraction!



Which fraction is marked?  
Use the fraction line to indicate the fraction!

