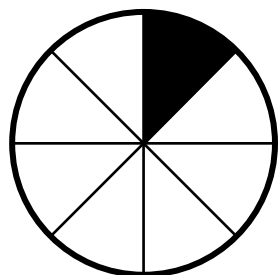



Übung zum Einstieg – Bruchteile erkennen

Bestimme jeweils den Bruchteil, der schwarz gekennzeichnet ist!




Bruchteil

$$\frac{1}{8}$$




Bruchteil

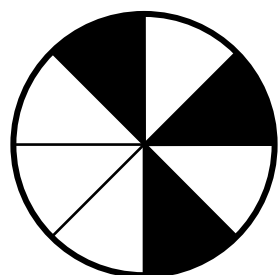
$$\frac{4}{8} = \frac{1}{2}$$



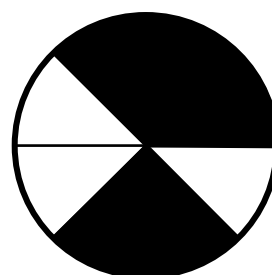
$$\frac{1}{4}$$



$$\frac{2}{4} = \frac{1}{2}$$



$$\frac{3}{8}$$



$$\frac{5}{8}$$