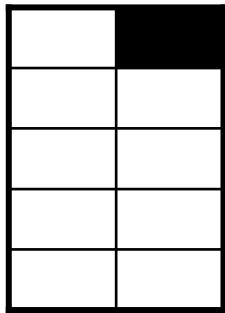



Übung zum Einstieg – Bruchteile erkennen

Bestimme jeweils den Bruchteil, der schwarz gekennzeichnet ist!




Bruchteil

$$\frac{1}{10}$$




Bruchteil


$$\frac{1}{20}$$




$$\frac{4}{25}$$



$$\frac{1}{3} = \frac{12}{36}$$



$$\frac{3}{20}$$



$$\frac{5}{9} = \frac{20}{36}$$